

Azaan International School

Activity sheet VII (2019-20)

Grade - I

Sec: _____


Subject- E.V.S

Name: _____


Date: _____

CHAPTER:17- MEANS OF TRANSPORT


I. Identify the mode of transport and tick the correct answer .




Water transport	Air transport	Land transport
-----------------	---------------	----------------



Water transport	Air transport	Land transport
-----------------	---------------	----------------



Water transport	Air transport	Land transport
-----------------	---------------	----------------



Water transport	Air transport	Land transport
-----------------	---------------	----------------



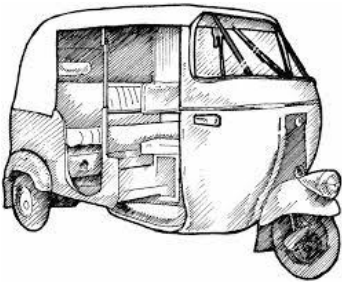


Water transport	Air transport	Land transport
-----------------	---------------	----------------


II. Fill in the blanks with the correct options given in the brackets.

1. The _____ is used to carry sick people to the hospital in case of emergency . (Scooter / Ambulance)
2. The _____ is used by fireman to travel to the places where fire needs to be put off . (Bus / Fire engine)
3. _____ makes a lot of noise. (Cycle / Car)
4. We can go to a _____ if we are in danger. (Police officer/strangers)
5. The most important part of a vehicle is an _____. (Wings /Engine)

III. Circle the vehicles which do not give out smoke.



IV. Draw a vehicle that we use in air/water.



Azaan International School

Activity sheet VII (2019-20)

Grade - I

Sec: _____


Subject- Math

Name: _____

Date: _____

Chapter -15. Handling Data

1. Look at the given pictures and answer.



a. How many stars are there? _____

b. How many circles are there? _____

c. How many squares are there? _____

d. How many triangles are there? _____

2. Look at the given table and answer .

Class 1 has 20 children. The following are their favorite subjects.

Favorite subject	Number of children
a. Maths	8
b. English	4
c. Evs	5
d. Telugu	3

a. Which subject is liked the most?

Ans. _____.

b. Which subject is liked the least?

Ans. _____.

c. Which subject is liked more English or Evs?

Ans. _____.

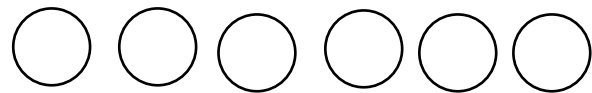

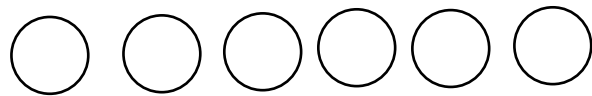

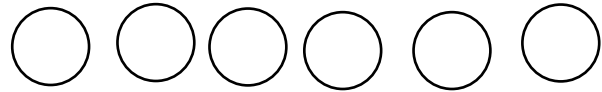

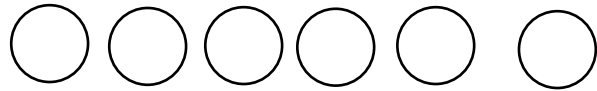
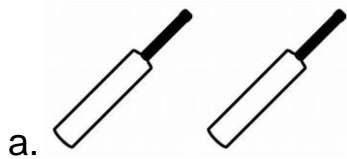
d. How many more children like Maths than Telugu?

Ans. _____.


e. How many children are there in the class-1?

Ans. _____.

3.Count the objects and colour the correct number of circles.



4.Sort the given animals according to their habits as water animals, land animals, and animals that live both on land and in water.



Water animals – _____

Land animals - _____

Both land and water animal - _____.